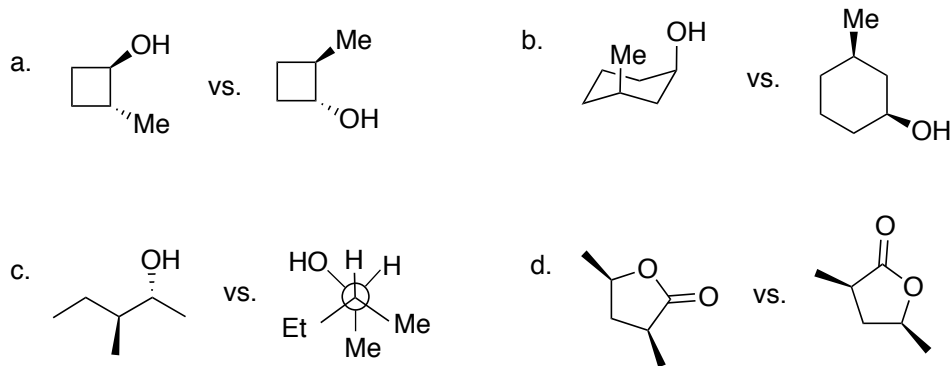


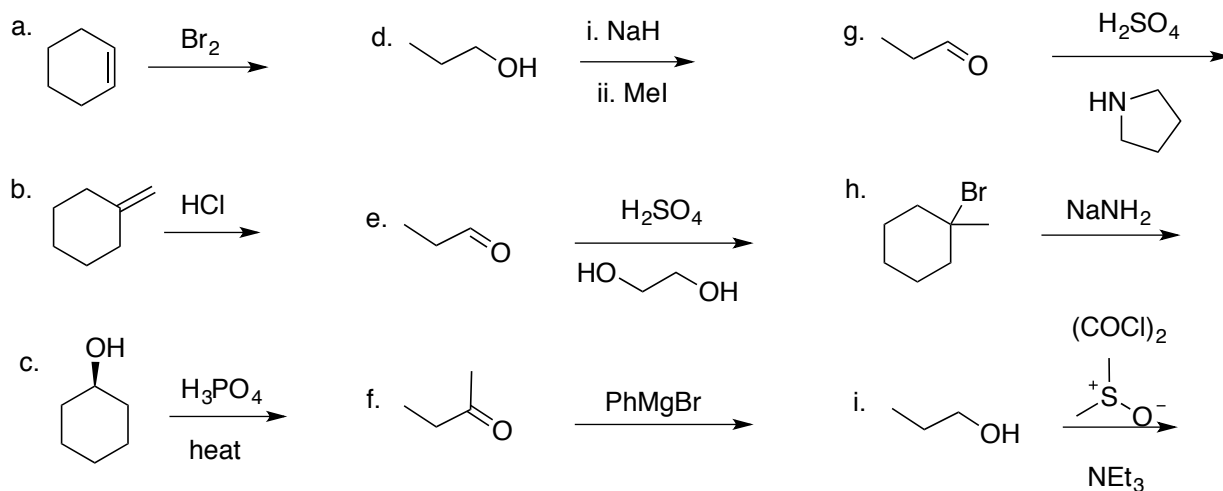
Intro Handout

You are responsible for everything learned in Organic I. The following should be meant to get your mind back in Organic Chemistry shape. You can also look back at old Organic I exams on my website.

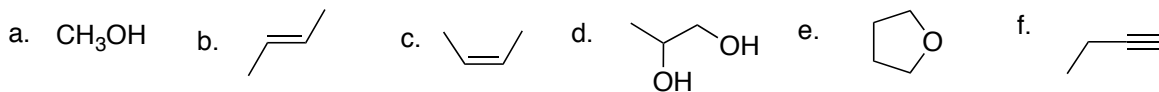
1. What are the relationships between the following (enantiomers, diastereomers, identical)



2. Predict a major product for the following Organic I reactions and show a mechanism that explains how it forms.



3. Propose synthesis for the following molecules starting from ethanol



4. Propose mechanisms for the following Organic II reactions you haven't seen yet using the knowledge you have learned from Organic I.

